



AP[®] Chemistry 2006 Scoring Guidelines Form B

The College Board: Connecting Students to College Success

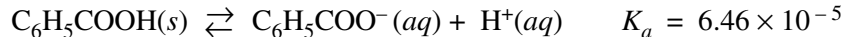
The College Board is a not-for-profit membership association whose mission is to connect students to college success and opportunity. Founded in 1900, the association is composed of more than 5,000 schools, colleges, universities, and other educational organizations. Each year, the College Board serves seven million students and their parents, 23,000 high schools, and 3,500 colleges through major programs and services in college admissions, guidance, assessment, financial aid, enrollment, and teaching and learning. Among its best-known programs are the SAT[®], the PSAT/NMSQT[®], and the Advanced Placement Program[®] (AP[®]). The College Board is committed to the principles of excellence and equity, and that commitment is embodied in all of its programs, services, activities, and concerns.

© 2006 The College Board. All rights reserved. College Board, AP Central, APCD, Advanced Placement Program, AP, AP Vertical Teams, Pre-AP, SAT, and the acorn logo are registered trademarks of the College Board. Admitted Class Evaluation Service, CollegeEd, connect to college success, MyRoad, SAT Professional Development, SAT Readiness Program, and Setting the Cornerstones are trademarks owned by the College Board. PSAT/NMSQT is a registered trademark of the College Board and National Merit Scholarship Corporation. All other products and services may be trademarks of their respective owners. Permission to use copyrighted College Board materials may be requested online at: www.collegeboard.com/inquiry/cbpermit.html.

Visit the College Board on the Web: www.collegeboard.com.
AP Central is the official online home for the AP Program: apcentral.collegeboard.com.

AP[®] CHEMISTRY
2006 SCORING GUIDELINES (Form B)

Question 1



1. Benzoic acid, $\text{C}_6\text{H}_5\text{COOH}$, dissociates in water as shown in the equation above. A 25.0 mL sample of an aqueous solution of pure benzoic acid is titrated using standardized 0.150 M NaOH.

(a) After addition of 15.0 mL of the 0.150 M NaOH, the pH of the resulting solution is 4.37. Calculate each of the following.

(i) $[\text{H}^+]$ in the solution

$[\text{H}^+] = 10^{-4.37} M = 4.3 \times 10^{-5} M$	One point is earned for the correct answer.
--	---

(ii) $[\text{OH}^-]$ in the solution

$[\text{OH}^-] = \frac{K_w}{[\text{H}^+]} = \frac{1.0 \times 10^{-14} M^2}{4.3 \times 10^{-5} M} = 2.3 \times 10^{-10} M$	One point is earned for the correct answer.
---	---

(iii) The number of moles of NaOH added

$\text{mol OH}^- = 0.0150 \text{ L} \times 0.150 \text{ mol L}^{-1} = 2.25 \times 10^{-3} \text{ mol}$	One point is earned for the correct answer.
--	---

(iv) The number of moles of $\text{C}_6\text{H}_5\text{COO}^-(aq)$ in the solution

$\text{mol OH}^- \text{ added} = \text{mol C}_6\text{H}_5\text{COO}^-(aq) \text{ generated, thus}$ $\text{mol C}_6\text{H}_5\text{COO}^-(aq) \text{ in solution} = 2.25 \times 10^{-3} \text{ mol}$	One point is earned for the correct answer.
--	---

(v) The number of moles of $\text{C}_6\text{H}_5\text{COOH}$ in the solution

$K_a = \frac{[\text{H}^+][\text{C}_6\text{H}_5\text{COO}^-]}{[\text{C}_6\text{H}_5\text{COOH}]} \Rightarrow [\text{C}_6\text{H}_5\text{COOH}] = \frac{[\text{H}^+][\text{C}_6\text{H}_5\text{COO}^-]}{K_a}$ $[\text{C}_6\text{H}_5\text{COOH}] = \frac{(4.3 \times 10^{-5} M) \times \frac{2.25 \times 10^{-3} \text{ mol}}{0.040 \text{ L}}}{6.46 \times 10^{-5}} = 3.7 \times 10^{-2} M$ $\text{thus, mol C}_6\text{H}_5\text{COOH} = (0.040 \text{ L})(3.7 \times 10^{-2} M) = 1.5 \times 10^{-3} \text{ mol}$	<p>One point is earned for the correct molarity.</p> <p>One point is earned for the correct answer.</p>
---	---

AP[®] CHEMISTRY
2006 SCORING GUIDELINES (Form B)

Question 1 (continued)

Alternative solution for part (a)(v):

$\text{pH} = \text{p}K_a + \log \frac{[\text{C}_6\text{H}_5\text{COO}^-]}{[\text{C}_6\text{H}_5\text{COOH}]}$ $\Rightarrow \text{pH} - \text{p}K_a = \log [\text{C}_6\text{H}_5\text{COO}^-] - \log [\text{C}_6\text{H}_5\text{COOH}]$ $\Rightarrow \log [\text{C}_6\text{H}_5\text{COOH}] = \log [\text{C}_6\text{H}_5\text{COO}^-] - (\text{pH} - \text{p}K_a)$ $= \log \left(\frac{2.25 \times 10^{-3} \text{ mol}}{0.040 \text{ L}} \right) - (4.37 - 4.190)$ $= -1.25 - 0.18 = -1.43$ $\Rightarrow [\text{C}_6\text{H}_5\text{COOH}] = 10^{-1.43} = 3.7 \times 10^{-2} \text{ M}$ <p>thus, $\text{mol C}_6\text{H}_5\text{COOH} = (0.040 \text{ L})(3.7 \times 10^{-2} \text{ M}) = 1.5 \times 10^{-3} \text{ mol}$</p>	
--	--

(b) State whether the solution at the equivalence point of the titration is acidic, basic, or neutral. Explain your reasoning.

<p>At the equivalence point the solution is <u>basic</u> due to the presence of $\text{C}_6\text{H}_5\text{COO}^-$ (the conjugate base of the weak acid) that hydrolyzes to produce a basic solution as represented below.</p> $\text{C}_6\text{H}_5\text{COO}^- + \text{H}_2\text{O} \rightleftharpoons \text{C}_6\text{H}_5\text{COOH} + \text{OH}^-$	<p>One point is earned for the prediction <u>and</u> the explanation.</p>
--	---

In a different titration, a 0.7529 g sample of a mixture of solid $\text{C}_6\text{H}_5\text{COOH}$ and solid NaCl is dissolved in water and titrated with 0.150 M NaOH . The equivalence point is reached when 24.78 mL of the base solution is added.

(c) Calculate each of the following.

(i) The mass, in grams, of benzoic acid in the solid sample

$\text{mol C}_6\text{H}_5\text{COOH} = (0.02478 \text{ L}) \times (0.150 \text{ mol OH}^- \text{ L}^{-1}) \times \frac{1 \text{ mol C}_6\text{H}_5\text{COOH}}{1 \text{ mol OH}^-}$ $= 3.72 \times 10^{-3} \text{ mol C}_6\text{H}_5\text{COOH}$ $\text{mass C}_6\text{H}_5\text{COOH} = 3.72 \times 10^{-3} \text{ mol C}_6\text{H}_5\text{COOH} \times \frac{122 \text{ g C}_6\text{H}_5\text{COOH}}{1 \text{ mol C}_6\text{H}_5\text{COOH}}$ $= 0.453 \text{ g C}_6\text{H}_5\text{COOH}$	<p>One point is earned for the correct answer.</p>
--	--

AP[®] CHEMISTRY
2006 SCORING GUIDELINES (Form B)

Question 1 (continued)

(ii) The mass percentage of benzoic acid in the solid sample

$\begin{aligned}\text{mass \% C}_6\text{H}_5\text{COOH} &= \frac{0.453 \text{ g C}_6\text{H}_5\text{COOH}}{0.7529 \text{ g}} \times 100 \\ &= 60.2\%\end{aligned}$	One point is earned for the correct answer.
--	---

AP[®] CHEMISTRY
2006 SCORING GUIDELINES (Form B)

Question 2

2. Answer the following questions about voltaic cells.

(a) A voltaic cell is set up using Al/Al^{3+} as one half-cell and Sn/Sn^{2+} as the other half-cell. The half-cells contain equal volumes of solutions and are at standard conditions.

(i) Write the balanced net-ionic equation for the spontaneous cell reaction.

$3 \text{Sn}^{2+} + 2 \text{Al} \rightarrow 3 \text{Sn} + 2 \text{Al}^{3+}$	One point is earned for the correct direction. One point is earned for the balanced net-ionic equation.
---	--

(ii) Determine the value, in volts, of the standard potential, E° , for the spontaneous cell reaction.

$E^\circ = -0.14 \text{ V} - (-1.66 \text{ V}) = 1.52 \text{ V} \text{ (or, } 1.52 \text{ J C}^{-1}\text{)}$	One point is earned for the correct answer. (Potential <u>must</u> be positive.)
--	---

(iii) Calculate the value of the standard free-energy change, ΔG° , for the spontaneous cell reaction. Include units with your answer.

$\Delta G^\circ = -nFE^\circ = -\frac{6 \text{ mol } e^-}{1 \text{ mol}} \times \frac{96,500 \text{ C}}{1 \text{ mol } e^-} \times (1.52 \text{ J C}^{-1})$ $= -8.80 \times 10^5 \text{ J mol}^{-1} \text{ (or } -880 \text{ kJ mol}^{-1}\text{)}$	One point is earned for indicating the correct mol e^- to mol reaction ratio. One point is earned for the correct answer with correct units.
--	---

(iv) If the cell operates until $[\text{Al}^{3+}]$ is 1.08 M in the Al/Al^{3+} half-cell, what is $[\text{Sn}^{2+}]$ in the Sn/Sn^{2+} half-cell?

$\text{change in } [\text{Sn}^{2+}] = \frac{0.08 \text{ mol Al}^{3+}}{1 \text{ L}} \times \frac{3 \text{ mol Sn}^{2+}}{2 \text{ mol Al}^{3+}} = \frac{0.12 \text{ mol Sn}^{2+}}{1 \text{ L}}$ $[\text{Sn}^{2+}] = 1.00 \text{ mol L}^{-1} - 0.12 \text{ mol L}^{-1} = 0.88 \text{ mol L}^{-1}$	One point is earned for the correct answer.
--	---

(b) In another voltaic cell with Al/Al^{3+} and Sn/Sn^{2+} half-cells, $[\text{Sn}^{2+}]$ is 0.010 M and $[\text{Al}^{3+}]$ is 1.00 M . Calculate the value, in volts, of the cell potential, E_{cell} , at 25°C .

$E_{\text{cell}} = 1.52 \text{ V} - \frac{0.0592}{6} \log \frac{(1.00)^2}{(0.010)^3}$ $= 1.52 \text{ V} - 0.0592 \text{ V} = 1.46 \text{ V}$	Answers must be consistent with part (a)(i). One point is earned for the proper exponents. One point is earned for the correct substitution of concentrations. One point is earned for the correct answer.
--	---

AP[®] CHEMISTRY
2006 SCORING GUIDELINES (Form B)

Question 3

3. Answer the following questions about the thermodynamics of the reactions represented below.



(a) Is reaction X, represented above, spontaneous under standard conditions? Justify your answer with a calculation.

$\Delta G^\circ = \Delta H^\circ - T\Delta S^\circ$ $= (18 \text{ kJ mol}^{-1}) - (298 \text{ K})(0.078 \text{ kJ mol}^{-1} \text{ K}^{-1}) = -5 \text{ kJ mol}^{-1}$ <p>Reaction is spontaneous because $\Delta G^\circ < 0$.</p>	<p>One point is earned for the correct value of ΔG°.</p> <p>One point is earned for a correct justification of spontaneity.</p>
--	---

(b) Calculate the value of the equilibrium constant, K_{eq} , for reaction X at 25°C.

$\Delta G^\circ = -RT \ln K_{eq} \Rightarrow \ln K_{eq} = -\frac{\Delta G^\circ}{RT}$ $\ln K_{eq} = -\frac{(-5 \text{ kJ mol}^{-1})(10^3 \text{ J kJ}^{-1})}{(8.31 \text{ J mol}^{-1} \text{ K}^{-1})(298 \text{ K})} = 2.019$ $K_{eq} = e^{2.019} = (7.5314) = 8$	<p>One point is earned for the correct answer.</p>
--	--

(c) What effect will an increase in temperature have on the equilibrium constant for reaction X? Explain your answer.

$\Delta G^\circ = -RT \ln K_{eq} = \Delta H^\circ - T\Delta S^\circ \Rightarrow \ln K_{eq} = -\frac{\Delta H^\circ}{RT} + \frac{\Delta S^\circ}{R}$ <p>Since ΔH° is positive, an increase in T will cause $-\Delta H^\circ/RT$ to become a smaller negative number, therefore K_{eq} will increase.</p> <p>OR</p> <p>The reaction is endothermic ($\Delta H = +18 \text{ kJ mol}^{-1}$); an increase in temperature shifts the reaction to favor more products relative to the reactants, resulting in an increase in the value of K_{eq}.</p>	<p>One point is earned for the correct choice with a correct explanation.</p>
--	---

AP[®] CHEMISTRY
2006 SCORING GUIDELINES (Form B)

Question 3 (continued)

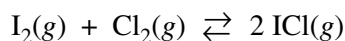
- (d) Explain why the standard entropy change is greater for reaction *Y* than for reaction *X*.

<p>Both reaction <i>X</i> and reaction <i>Y</i> have solid iodine as a reactant, but the second reactant in reaction <i>X</i> is chlorine gas whereas the second reactant in reaction <i>Y</i> is liquid bromine. Liquids have lower entropies than gases, thus in reaction <i>Y</i> the reactants are more ordered (and have lower entropies) than in reaction <i>X</i>. The products of both reaction <i>X</i> and reaction <i>Y</i> have about the same disorder, so the <u>change</u> in entropy from reactants to products is greater in reaction <i>Y</i> than in reaction <i>X</i>.</p>	<p>One point is earned for a correct explanation.</p>
--	---

- (e) Above what temperature will the value of the equilibrium constant for reaction *Y* be greater than 1.0? Justify your answer with calculations.

$\Delta G^\circ = \Delta H^\circ - T\Delta S^\circ$ $K_{eq} = 1 \text{ when } \Delta G^\circ = 0 \Rightarrow T\Delta S^\circ = \Delta H^\circ \Rightarrow$ $T = \frac{\Delta H^\circ}{\Delta S^\circ} = \frac{41 \text{ kJ mol}^{-1}}{0.124 \text{ kJ mol}^{-1}\text{K}^{-1}} = 330 \text{ K}$ <p>So when $T > 330 \text{ K}$, $\Delta G^\circ < 0 \text{ kJ mol}^{-1} \Rightarrow K_{eq} > 1.0$</p>	<p>One point is earned for $\Delta G^\circ = 0$.</p> <p>One point is earned for the correct temperature.</p>
---	---

- (f) For the vaporization of solid iodine, $\text{I}_2(s) \rightarrow \text{I}_2(g)$, the value of ΔH_{298}° is 62 kJ mol^{-1} . Using this information, calculate the value of ΔH_{298}° for the reaction represented below.



$\begin{array}{l} \text{I}_2(s) + \text{Cl}_2(g) \rightleftharpoons 2 \text{ICl}(g) \quad \Delta H_{298}^\circ = 2 \times 18 \text{ kJ mol}^{-1} \\ \text{I}_2(g) \rightleftharpoons \text{I}_2(s) \quad \Delta H_{298}^\circ = -62 \text{ kJ mol}^{-1} \\ \hline \text{I}_2(g) + \text{Cl}_2(g) \rightleftharpoons 2 \text{ICl}(g) \quad \Delta H_{298}^\circ = -26 \text{ kJ mol}^{-1} \end{array}$	<p>One point is earned for ΔH_{298}° of either the first or second equation.</p> <p>One point is earned for the correct sum of the ΔH_{298}° values.</p>
---	--

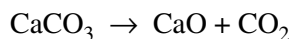
AP[®] CHEMISTRY
2006 SCORING GUIDELINES (Form B)

Question 4

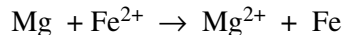
4. Write the formulas to show the reactants and the products for any FIVE of the laboratory situations described below. Answers to more than five choices will not be graded. In all cases, a reaction occurs. Assume that solutions are aqueous unless otherwise indicated. Represent substances in solution as ions if the substances are extensively ionized. Omit formulas for any ions or molecules that are unchanged by the reaction. You need not balance the equations.

General Scoring: Three points can be earned for each reaction: one point for the correct reactant(s) and two points for the correct product(s).

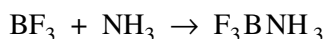
- (a) Solid calcium carbonate is strongly heated.



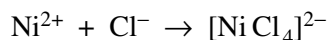
- (b) A strip of magnesium metal is placed in a solution of iron(II) chloride.



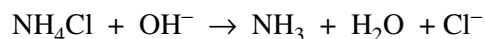
- (c) Boron trifluoride gas is mixed with ammonia gas.



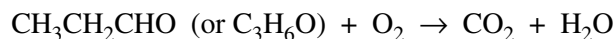
- (d) Excess concentrated hydrochloric acid is added to a solution of nickel(II) nitrate.



- (e) Solid ammonium chloride is added to a solution of potassium hydroxide.



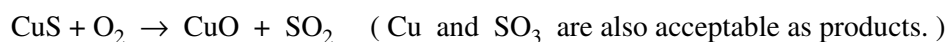
- (f) Propanal is burned in air.



- (g) A strip of aluminum foil is placed in liquid bromine.



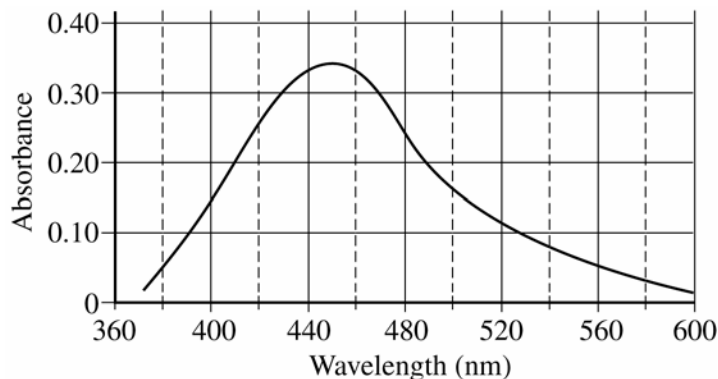
- (h) Solid copper(II) sulfide is strongly heated in air.



AP[®] CHEMISTRY
2006 SCORING GUIDELINES (Form B)

Question 5

5. A student carries out an experiment to determine the equilibrium constant for a reaction by colorimetric (spectrophotometric) analysis. The production of the red-colored species $\text{FeSCN}^{2+}(aq)$ is monitored.
- (a) The optimum wavelength for the measurement of $[\text{FeSCN}^{2+}]$ must first be determined. The plot of absorbance, A , versus wavelength, λ , for $\text{FeSCN}^{2+}(aq)$ is given below. What is the optimum wavelength for this experiment? Justify your answer.



The optimum wavelength is 450 nm because that is the wavelength of maximum absorbance by $\text{FeSCN}^{2+}(aq)$.

One point is earned for the correct answer with justification.

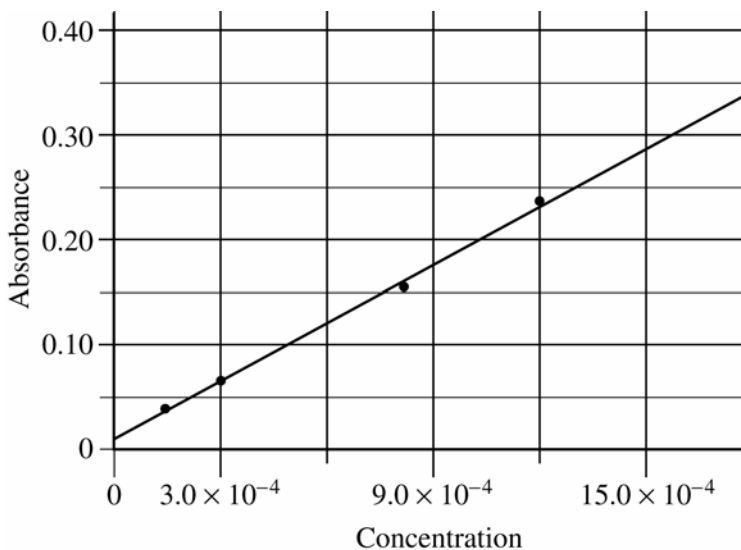
- (b) A calibration plot for the concentration of $\text{FeSCN}^{2+}(aq)$ is prepared at the optimum wavelength. The data below give the absorbances measured for a set of solutions of known concentration of $\text{FeSCN}^{2+}(aq)$.

Concentration (mol L^{-1})	Absorbance
1.1×10^{-4}	0.030
3.0×10^{-4}	0.065
8.0×10^{-4}	0.160
12×10^{-4}	0.239
18×10^{-4}	0.340

AP[®] CHEMISTRY
2006 SCORING GUIDELINES (Form B)

Question 5 (continued)

- (i) Draw a Beer's law calibration plot of all the data on the grid below. Indicate the scale on the horizontal axis by labeling it with appropriate values.



One point is earned for a straight-line plot.
One point is earned for a correctly scaled horizontal axis.

- (ii) An $\text{FeSCN}^{2+}(aq)$ solution of unknown concentration has an absorbance of 0.300. Use the plot you drew in part (i) to determine the concentration, in moles per liter, of this solution.

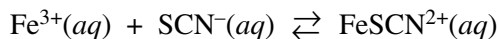
See plot in part (i). At $A = 0.300$, $[\text{FeSCN}^{2+}]$ is approximately $16 \times 10^{-4} \text{ mol L}^{-1}$.

One point is earned for the correct answer.

AP[®] CHEMISTRY
2006 SCORING GUIDELINES (Form B)

Question 5 (continued)

- (c) The purpose of the experiment is to determine the equilibrium constant for the reaction represented below.



- (i) Write the equilibrium-constant expression for K_c .

$K_c = \frac{[\text{FeSCN}^{2+}]}{[\text{Fe}^{3+}][\text{SCN}^{-}]}$	One point is earned for the correct expression.
--	---

- (ii) The student combines solutions of $\text{Fe}(\text{NO}_3)_3$ and KSCN to produce a solution in which the initial concentrations of $\text{Fe}^{3+}(\text{aq})$ and $\text{SCN}^{-}(\text{aq})$ are both $6.0 \times 10^{-3} \text{ M}$. The absorbance of this solution is measured, and the equilibrium $\text{FeSCN}^{2+}(\text{aq})$ concentration is found to be $1.0 \times 10^{-3} \text{ M}$. Determine the value of K_c .

<table style="width: 100%; border-collapse: collapse;"> <tr> <td style="width: 15%;"></td> <td style="width: 15%; text-align: center;">$\text{Fe}^{3+}(\text{aq})$</td> <td style="width: 10%; text-align: center;">+</td> <td style="width: 15%; text-align: center;">$\text{SCN}^{-}(\text{aq})$</td> <td style="width: 10%; text-align: center;">\rightleftharpoons</td> <td style="width: 35%; text-align: center;">$\text{FeSCN}^{2+}(\text{aq})$</td> </tr> <tr> <td style="text-align: center;">I</td> <td style="text-align: center;">$6.0 \times 10^{-3} \text{ M}$</td> <td></td> <td style="text-align: center;">$6.0 \times 10^{-3} \text{ M}$</td> <td></td> <td style="text-align: center;">0</td> </tr> <tr> <td style="text-align: center;">C</td> <td style="text-align: center;">$-1.0 \times 10^{-3} \text{ M}$</td> <td></td> <td style="text-align: center;">$-1.0 \times 10^{-3} \text{ M}$</td> <td></td> <td style="text-align: center;">$+1.0 \times 10^{-3} \text{ M}$</td> </tr> <tr> <td style="text-align: center;">E</td> <td style="text-align: center;">$5.0 \times 10^{-3} \text{ M}$</td> <td></td> <td style="text-align: center;">$5.0 \times 10^{-3} \text{ M}$</td> <td></td> <td style="text-align: center;">$+1.0 \times 10^{-3} \text{ M}$</td> </tr> </table> <p style="text-align: center; margin-top: 10px;"> $K_c = \frac{1.0 \times 10^{-3}}{(5.0 \times 10^{-3})(5.0 \times 10^{-3})} = 40.$ </p>		$\text{Fe}^{3+}(\text{aq})$	+	$\text{SCN}^{-}(\text{aq})$	\rightleftharpoons	$\text{FeSCN}^{2+}(\text{aq})$	I	$6.0 \times 10^{-3} \text{ M}$		$6.0 \times 10^{-3} \text{ M}$		0	C	$-1.0 \times 10^{-3} \text{ M}$		$-1.0 \times 10^{-3} \text{ M}$		$+1.0 \times 10^{-3} \text{ M}$	E	$5.0 \times 10^{-3} \text{ M}$		$5.0 \times 10^{-3} \text{ M}$		$+1.0 \times 10^{-3} \text{ M}$	<p style="text-align: center;">One point is earned for the correct equilibrium concentration.</p> <p style="text-align: center;">One point is earned for the correct substitutions <u>and</u> the calculated value.</p>
	$\text{Fe}^{3+}(\text{aq})$	+	$\text{SCN}^{-}(\text{aq})$	\rightleftharpoons	$\text{FeSCN}^{2+}(\text{aq})$																				
I	$6.0 \times 10^{-3} \text{ M}$		$6.0 \times 10^{-3} \text{ M}$		0																				
C	$-1.0 \times 10^{-3} \text{ M}$		$-1.0 \times 10^{-3} \text{ M}$		$+1.0 \times 10^{-3} \text{ M}$																				
E	$5.0 \times 10^{-3} \text{ M}$		$5.0 \times 10^{-3} \text{ M}$		$+1.0 \times 10^{-3} \text{ M}$																				

- (d) If the student's equilibrium $\text{FeSCN}^{2+}(\text{aq})$ solution of unknown concentration fades to a lighter color before the student measures its absorbance, will the calculated value of K_c be too high, too low, or unaffected? Justify your answer.

The value of K_c will be too low; the lower absorbance reading indicates a lower $[\text{FeSCN}^{2+}]$ than actually existed before the fading occurred, so substitution of a lower $[\text{FeSCN}^{2+}]$ into the equilibrium expression will result in a lower value of K_c .	<p style="text-align: center;">One point is earned for the correct prediction.</p> <p style="text-align: center;">One point is earned for the correct justification.</p>
---	--

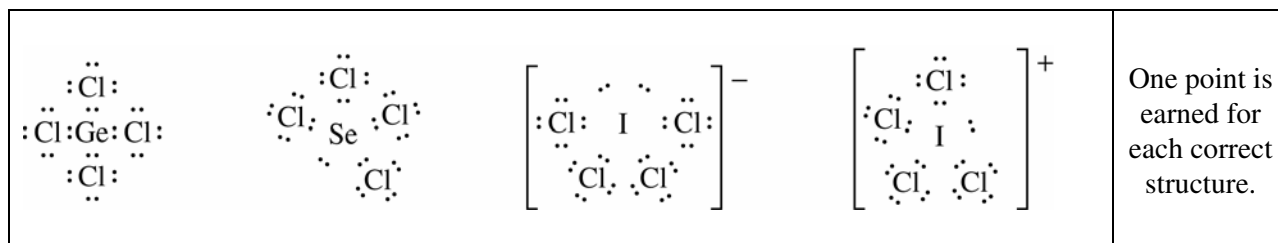
AP[®] CHEMISTRY
2006 SCORING GUIDELINES (Form B)

Question 6



6. The species represented above all have the same number of chlorine atoms attached to the central atom.

(a) Draw the Lewis structure (electron-dot diagram) of each of the four species. Show all valence electrons in your structures.



(b) On the basis of the Lewis structures drawn in part (a), answer the following questions about the particular species indicated.

(i) What is the Cl – Ge – Cl bond angle in GeCl_4 ?

109.5°	One point is earned for the correct angle.
--------	--

(ii) Is SeCl_4 polar? Explain.

Yes. The SeCl_4 molecule is polar because the lone pair of nonbonding electrons in the valence shell of the selenium atom interacts with the bonding pairs of electrons, causing a spatial asymmetry of the dipole moments of the polar Se-Cl bonds. The result is a SeCl_4 molecule with a net dipole moment.	One point is earned for the correct answer.
--	---

(iii) What is the hybridization of the I atom in ICl_4^- ?

d^2sp^3 or sp^3d^2	One point is earned for the correct hybridization.
------------------------	--

(iv) What is the geometric shape formed by the atoms in ICl_4^+ ?

See-saw (or distorted tetrahedral or disphenoidal)	One point is earned for the correct shape.
--	--

AP[®] CHEMISTRY
2006 SCORING GUIDELINES (Form B)

Question 7

7. Account for each of the following observations in terms of atomic theory and/or quantum theory.

(a) Atomic size decreases from Na to Cl in the periodic table.

Across the periodic table from Na to Cl, the number of electrons in the <i>s</i> - and <i>p</i> - orbitals of the valence shell increases, as does the number of protons in the nucleus. The added electrons only partially shield the added protons, resulting in an increased effective nuclear charge. This results in a greater attraction for the electrons, drawing them closer to the nucleus, making the atom smaller.	One point is earned for indicating the increase in nuclear charge. One point is earned for attributing the size decrease to the greater attraction of the nucleus for the electrons caused by the increase in nuclear charge.
--	--

(b) Boron commonly forms molecules of the type BX_3 . These molecules have a trigonal planar structure.

Boron has three valence electrons, each of which can form a single covalent bond with X. The three single covalent bonds of the boron atom orient to minimize electron-pair interaction, resulting in bond angles of 120° and a trigonal planar structure.	One point is earned for describing the valence electrons and the bonds. One point is earned for a correct VSEPR argument.
---	--

(c) The first ionization energy of K is less than that of Na.

Both Na and K have an s^1 valence-shell electron configuration (Na: $[Ne] 3s^1$; K: $[Ar] 4s^1$). The K atom valence electron has a higher <i>n</i> quantum number, placing it farther from the nucleus than the Na atom valence electron. The greater distance results in less attraction to the nucleus. Because its valence electron is less attracted to its nucleus, the K atom has the lower ionization energy.	One point is earned for the size explanation. One point is earned for describing the attraction to the nucleus.
---	--

(d) Each element displays a unique gas-phase emission spectrum.

Each element has a unique set of quantized energy states for its electrons (because of its unique nuclear charge and unique electron configuration). As the electrons of an element absorb quanta of energy, they change to higher energy states (are excited) – during de-excitation, energy is released as EM radiation as the electrons cascade to lower energy states. Each photon of the EM radiation is associated with a specific wavelength ($\lambda = hc/E$), a flux of which produces the lines of the emission spectrum.	One point is earned for describing the quantized energy states and emission phenomenon. One point is earned for describing the effect of the uniqueness of the nucleus and/or electron configuration.
--	--

AP[®] CHEMISTRY
2006 SCORING GUIDELINES (Form B)

Question 8

8. Use chemical and physical principles to account for each of the following.

- (a) An aluminum container filled with an aqueous solution of CuSO_4 eventually developed a leak. Include a chemical equation with your answer.

$\text{Al}(s) + \text{Cu}^{2+}(aq) \rightarrow \text{Al}^{3+}(aq) + \text{Cu}(s)$ <p>Cu^{2+} has a higher reduction potential than does Al^{3+}, which results in the oxidation and eventual disappearance of the Al metal (depending upon the amount of Cu^{2+}).</p>	<p>One point is earned for the correct equation (phases not required).</p> <p>One point is earned for the explanation of relative reactivity.</p>
--	---

- (b) The inside of a metal container was cleaned with steam and immediately sealed. Later, the container imploded.

<p>The high temperature of the steam causes the air/water mixture in the container to be at an elevated temperature. When the container is sealed and the temperature decreases, the pressure of the residual gases decreases below the external pressure, causing the implosion. The decrease in pressure occurs because pressure is proportional to temperature and/or vapor pressure of water decrease with temperature, which means that condensation occurs upon cooling with a resultant pressure drop.</p>	<p>One point is earned for explaining the implosion in terms of internal pressure decrease.</p> <p>One point is earned for the explanation of the change of pressure (either cause is accepted).</p>
---	--

- (c) Skin feels cooler after rubbing alcohol has been applied to it.

<p>Rubbing alcohol evaporates rapidly. Evaporation is endothermic so heat energy is absorbed from the skin in the process, which causes the cooling sensation.</p>	<p>One point is earned for reference to the volatility of the alcohol.</p> <p>One point is earned for discussing the endothermic nature of the process.</p>
--	---

- (d) The redness and itching of the skin caused by ant bites (injections of methanoic acid, HCO_2H) can be relieved by applying a paste made from water and baking soda (solid sodium hydrogen carbonate). Include a chemical equation with your answer.

$\text{HCO}_2\text{H} + \text{NaHCO}_3 \rightarrow \text{NaHCO}_2 + \text{H}_2\text{O} + \text{CO}_2$ <p>Methanoic acid is neutralized by the HCO_3^- ion; with the neutralization of the acid; the redness and itching of the ant bites subside.</p>	<p>One point is earned for the equation.</p> <p>One point is earned for the explanation.</p>
---	--